


Year 2


Time

Name _____


1 Match each time to the time shown on the clock.




9 o'clock



half past 12



half past 9



6 o'clock




3 marks


2


Write the time shown on each clock.
Use these words to help you.

quarter past

quarter to



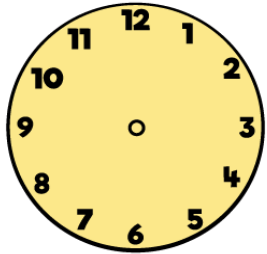







3 marks

3 Draw the hands on the clocks to show each time.

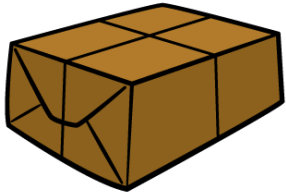


five past 9



twenty to 8

4 A machine fills one box every minute.
How many boxes does it fill in one hour?



_____ boxes



2 marks



1 mark

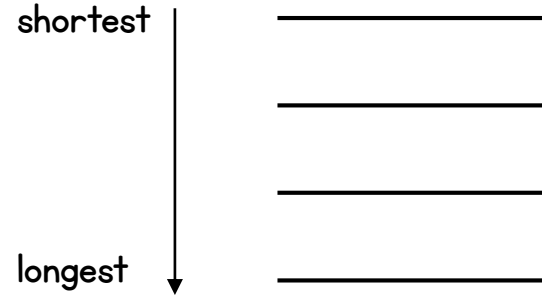
5 Order the times from shortest to longest.

1 hour

half an hour

5 minutes

42 minutes



2 marks

6 Jane sets off to school at 7 o'clock.
She arrives at school at 25 minutes to 8.
How long was Jane's journey?

_____ minutes



1 mark

Circle how confident you feel with time.

1 2 3 4 5
Not Very
confident confident